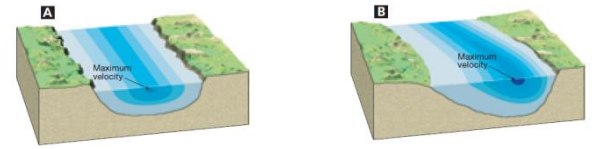


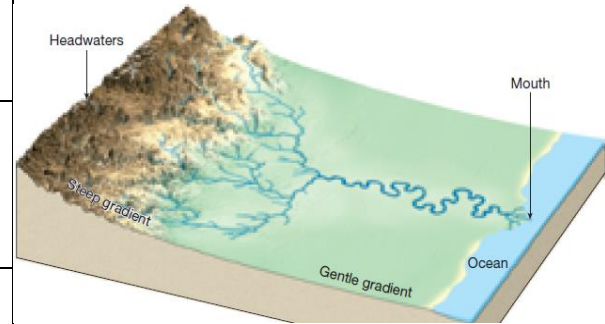
CH 6: RUNNING WATER NOTES

Stream flow



Stream flow Velocity Factors

1)	
2)	
3)	



Changes from Upstream to Downstream

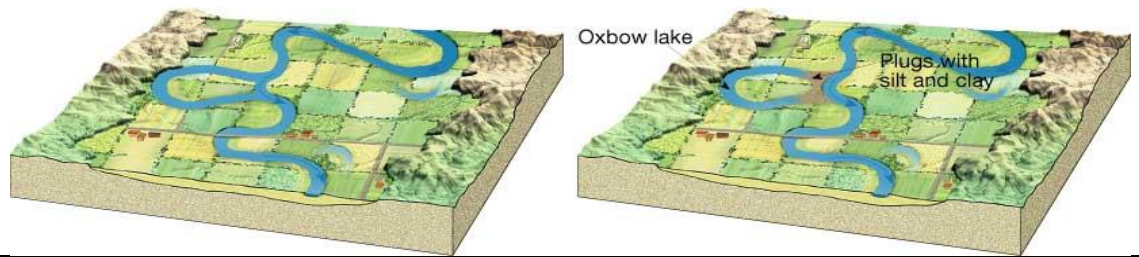
<p>a)</p>	<p>b)</p>
-----------	-----------

The Work of Streams

Two Types of Stream Valleys

<p>1)</p>	
-----------	--

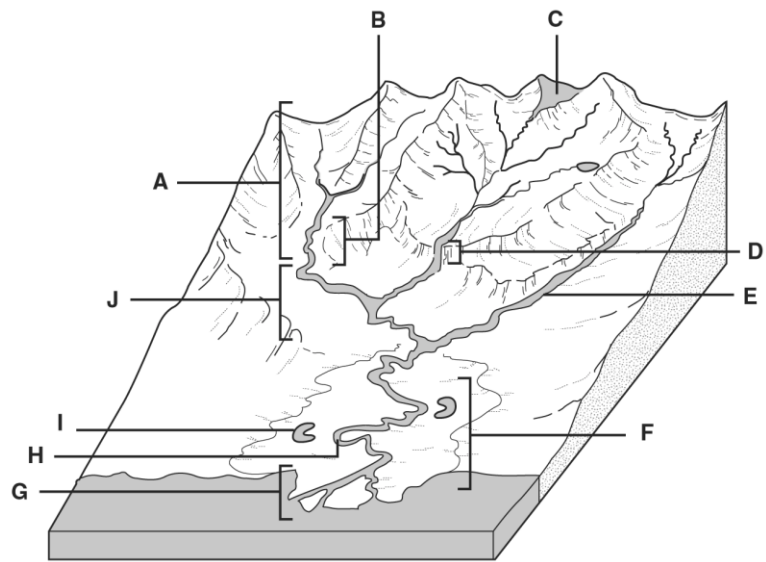
2)



Floods

River System Activity

1. Which letter indicates the young rivers in the system? _____
2. Which letter indicates a mature river in the system? _____
3. Which letter indicates the mouth of the river? _____
4. Which letter indicates a meander? _____
5. Which letter indicates rapids? _____
6. What does letter *E* label? _____
7. What does letter *D* label? _____
8. What does letter *I* label? _____
9. Which letter indicates a source of the river? _____



What are rivers and streams?

Lesson Review

PART A Complete the table by placing check marks in the correct columns.

RIVER CHARACTERISTICS		
Characteristic	Youthful	Mature
1. Slow-moving water		
2. Meanders		
3. Fast-moving water		
4. Waterfalls		
5. Nearly flat slope		
6. Narrow, V-shaped valleys		
7. No waterfalls or rapids		
8. Oxbow lakes		
9. Rapids		